


# Think together

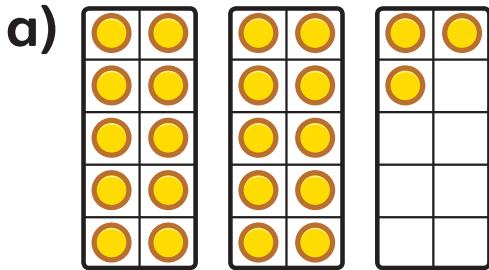
1 How many  are there in total?



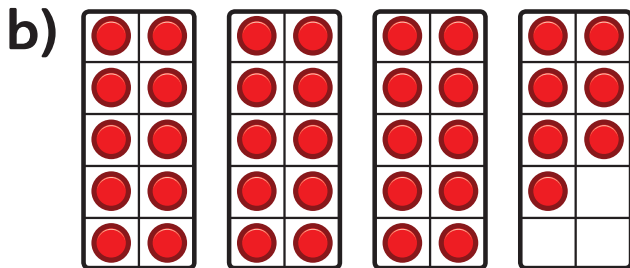

There are   in total.

is  tens and  ones.

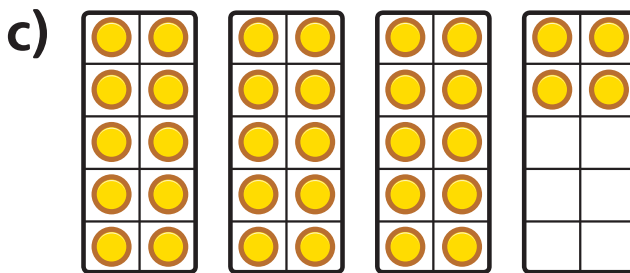
2 Write the numbers that the counters show.



tens and  ones is .



tens and  ones is .



tens and  ones is .

3 Look at the table below for the number 28.

CHALLENGE

	2 tens and 8 ones	28
--	----------------------	----

Make your own table for the number 34.